

Name _____

Date August 25, 2014

Back To School Brain Teasers Puzzle CW/HW

Block ____ Day ____

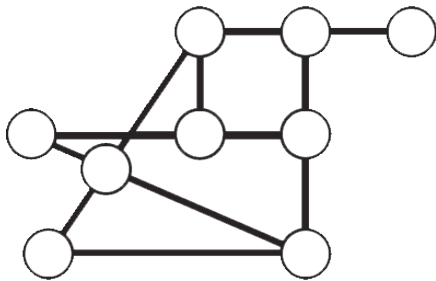
Can you circle exactly four of these numbers such that the total is twelve? Explain your solution in the space provided.

1 6 1
6 1 6
1 6 1
6 1 6

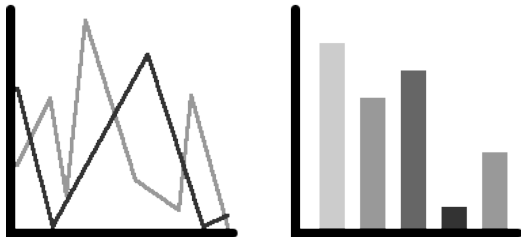
What is represented by this rebus?

- EEGVTABLES
- EGVETABLES
- GEEVTABLES
- VEEGTABLES

Place all of the digits from 1 to 9 into the circles so that the sum of the numbers in each straight line is the same.



What is represented by this rebus? (It is a common word.)




What number comes next in this sequence? Explain your rationale in the space provided.

917452 97452 9745 975 ==?==

What is represented by this rebus?

poFISHnd



When a clock's reflection is 2.30, what time is it really?

What is the smallest integer, which, when multiplied by 2 gives a number consisting of only 8's. Explain your answer in the space provided.

Starting with any number on the top row, make your way to the bottom, adding the numbers as you go. Each time you go to the next row, you can move straight down, or one place to the left or right. What is the highest total you can make? What is the lowest?

1	5	1	5	1	5
3	3	2	3	3	4
2	3	4	4	3	2
2	2	3	2	2	4
2	2	4	3	4	2
4	4	4	4	2	3